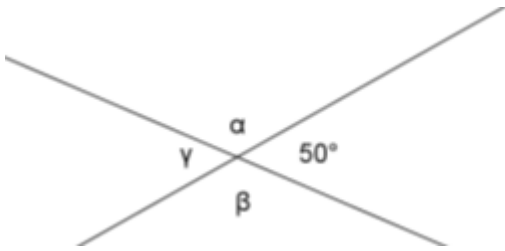


Př. 1:

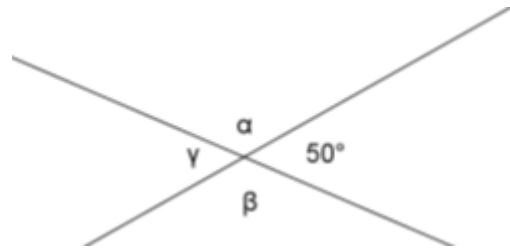


$\alpha =$

$\beta =$

$\gamma =$

Př. 1:

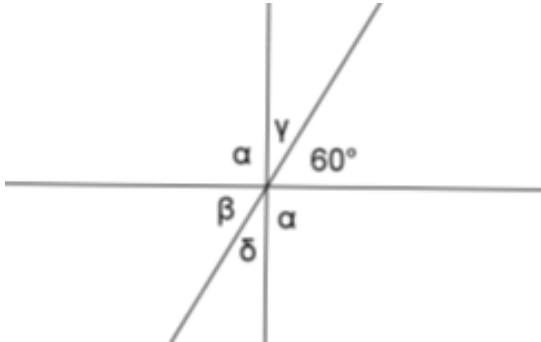


$\alpha =$

$\beta =$

$\gamma =$

Př. 2:



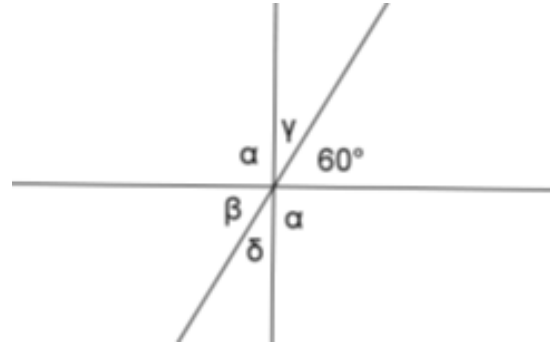
$\alpha =$

$\beta =$

$\gamma =$

$\delta =$

Př. 2:



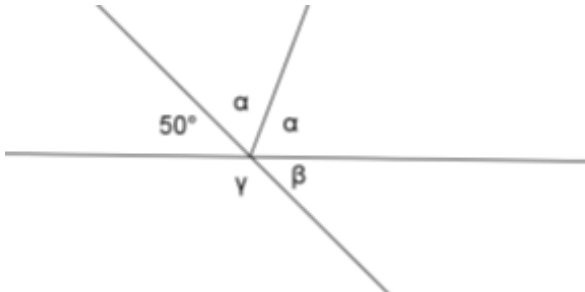
$\alpha =$

$\beta =$

$\gamma =$

$\delta =$

Př. 3:

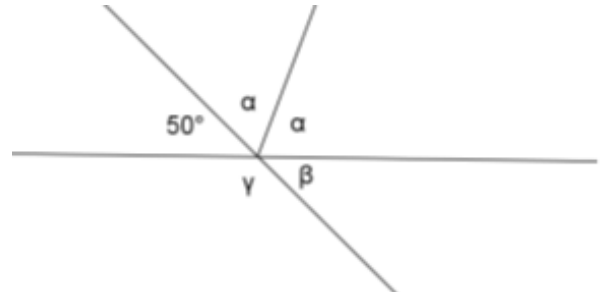


$\alpha =$

$\beta =$

$\gamma =$

Př. 3:

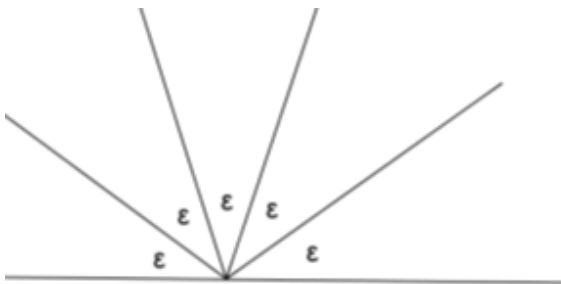


$\alpha =$

$\beta =$

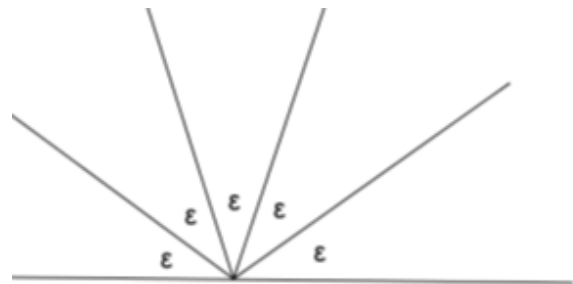
$\gamma =$

Př. 4:



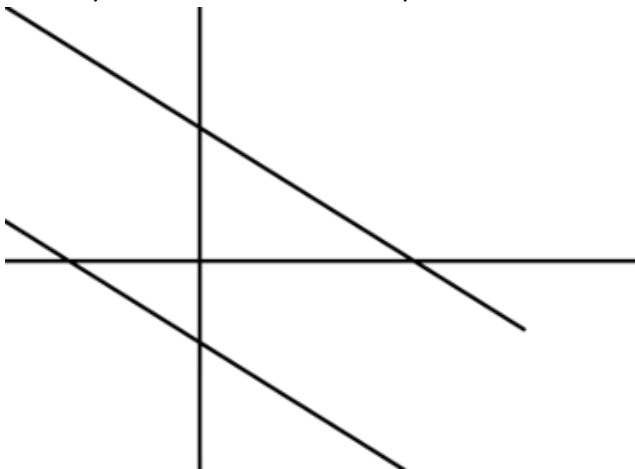
$\epsilon =$

Př. 4:



$\epsilon =$

Př. 5: Vyznač barevně shodné úhly:



Př. 5: Vyznač barevně shodné úhly:

